









































Name _____

Date _____

1. Skip-count by fours. Match each answer to the appropriate expression.

				<input type="text" value="4"/>
				<input type="text" value="8"/>
				<input type="text"/>
				<input type="text"/>
				<input type="text"/>
				<input type="text"/>
				<input type="text"/>
				<input type="text"/>
				<input type="text"/>
				<input type="text"/>

<input type="text" value="6 × 4"/>
<input type="text" value="10 × 4"/>
<input type="text" value="5 × 4"/>
<input type="text" value="1 × 4"/>
<input type="text" value="4 × 4"/>
<input type="text" value="9 × 4"/>
<input type="text" value="2 × 4"/>
<input type="text" value="8 × 4"/>
<input type="text" value="7 × 4"/>
<input type="text" value="3 × 4"/>

2. Mr. Schmidt replaces each of the 4 wheels on 7 cars. How many wheels does he replace? Draw and label a tape diagram to solve.

Mr. Schmidt replaces _____ wheels.

3. Trina makes 4 bracelets. Each bracelet has 6 beads. Draw and label a tape diagram to show the total number of beads Trina uses.

4. Find the total number of sides on 5 rectangles.